



10TH SSC MCQ - CH - LOCATION AND EXTENT

DATE: _____

TIME: 23 Min

MARKS: 23

SEAT NO: _____

--	--	--	--	--	--

Note:-

1. All Questions are compulsory.
2. Numbers on the right indicate full marks.

Q.1 Which of the following terminal do not fall in the route of North South corridor of road in India? **(1)**

- A) Varanasi B) Bengaluru
C) Gwalior D) Hyderabad

Ans : A

Q.2 The name 'Brazil' comes from '_____', a local wooded tree. **(1)**

- A) Brasilia B) Rio de Brazil
C) Pau Brasil D) Sao Paulo

Ans : C

Q.3 _____ passes through the central part of India. **(1)**

- A) Arctic Circle B) Equator
C) Tropic of Capricorn D) Tropic of Cancer

Ans : D

Q.4 Brazil has federal _____ republic type of government. **(1)**

- A) parliamentary B) presidential
C) communist D) monarchy

Ans : B

Q.5 India has federal _____ republic type of government. **(1)**

- A) parliamentary B) presidential
C) communist D) monarchy

Ans : A

Q.6 Brazil got its independence in the year _____. **(1)**

- A) 1822 B) 1847
C) 1922 D) 1947

Ans : A

Q.7 India got its independence in the year _____. **(1)**

- A) 1822 B) 1847
C) 1922 D) 1947

Ans : D

Q.8 _____ is the capital city of Brazil. **(1)**

- A) Brasilia B) Sao Paulo
C) Amazonas D) Bahia

Ans : A

Q.9 _____ is the capital city of India. (1)

- A) New Delhi B) Mumbai
- C) Kolkata D) Kerala

Ans : A

Q.10 _____ is the popular sport of Brazil (1)

- A) Mahjong B) Cricket
- C) Ice-skating D) Football

Ans : D

Q.11 _____ is the popular sport of India. (1)

- A) Mahjong B) Cricket
- C) Ice-skating D) Football

Ans : B

Q.12 Brazil is known as the _____ of the world (1)

- A) coffee pot B) tea pot
- C) hot pot D) spice pot

Ans : A

Q.13 India is famous for _____ in the world. (1)

- A) samba B) football
- C) coffee D) spices

Ans : D

Q.14 Brazil is famous for _____ dance. (1)

- A) Ballet B) Samba
- C) Hip hop D) Bharatanatyam

Ans : B

Q.15 _____ is the second largest populated country in the world. (1)

- A) China B) Thailand
- C) India D) Brazil

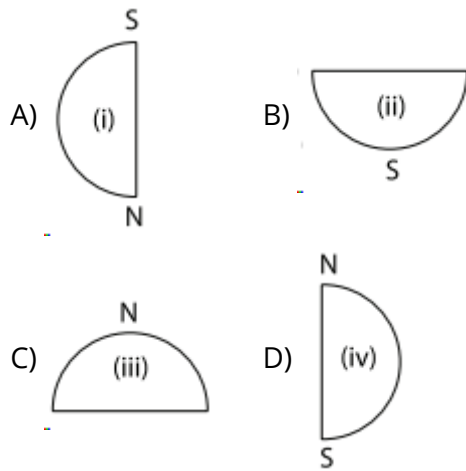
Ans : C

Q.16 In which hemispheres of the earth, is India located? (1)

- A) Southern and eastern hemisphere B) Northern and eastern hemisphere
- C) Western and northern hemisphere D) Southern and western hemisphere

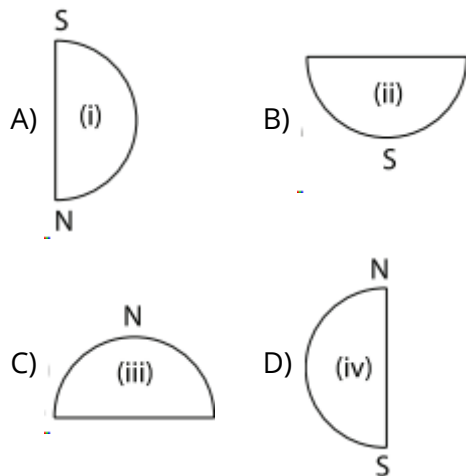
Ans : B

Q.17 Considering the hemisphere, which shape correctly represents the hemisphere in which Brazil mainly lies? (1)



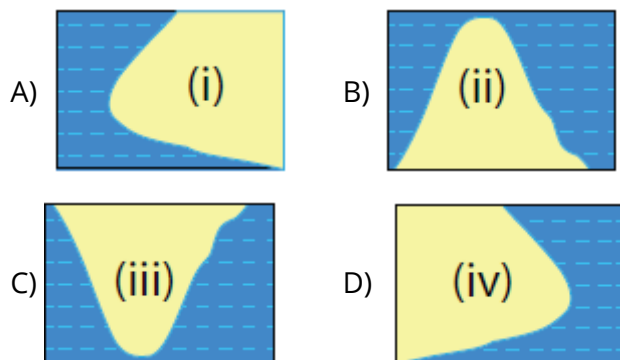
Ans : B

Q.18 Considering the hemisphere, which shape correctly represents the hemisphere in which India lies? (1)



Ans : C

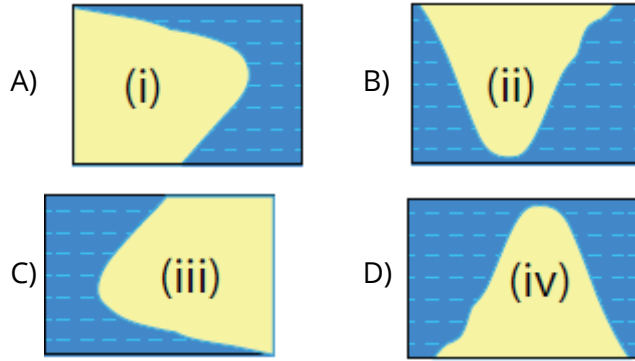
Q.19 Which of the following shapes show the coastal part of India correctly? (1)



Ans : C

Q.20 Which of the following shapes show the coastal part of Brazil correctly?

(1)



Ans : A

Q.21 Both the countries have _____ type of government.

(1)

- A) Military B) Communist
C) Republic D) Presidential

Ans : C

Q.22 These two countries in South America do not share their border with Brazil.

(1)

- A) Chile-Ecuador B) Argentina-Bolivia
C) Columbia-French Guiana D) Surinam-Uruguay

Ans : A

Q.23 India's southernmost point is known as _____ .

(1)

- A) Lakshadweep B) Kanyakumari
C) Indira Point D) Port Blair

Ans : C